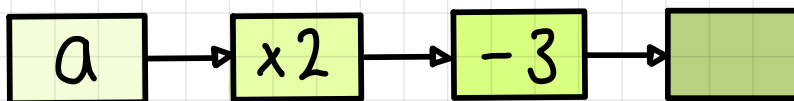
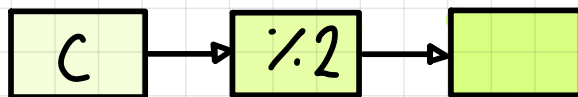
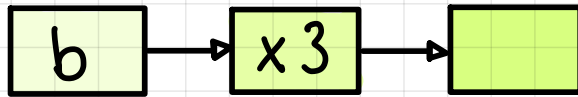
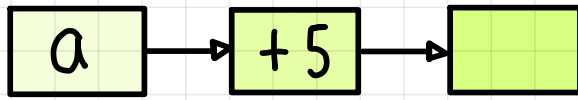


# EXIT TICKET

SINGLE FUNCTION  
MACHINES - ALGEBRA

1) Complete the following:



2) Why can't we write  $a + 5$  as  $5a$ ?

3) Complete the following

