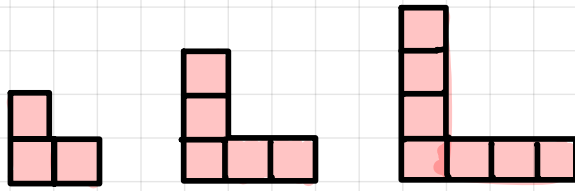


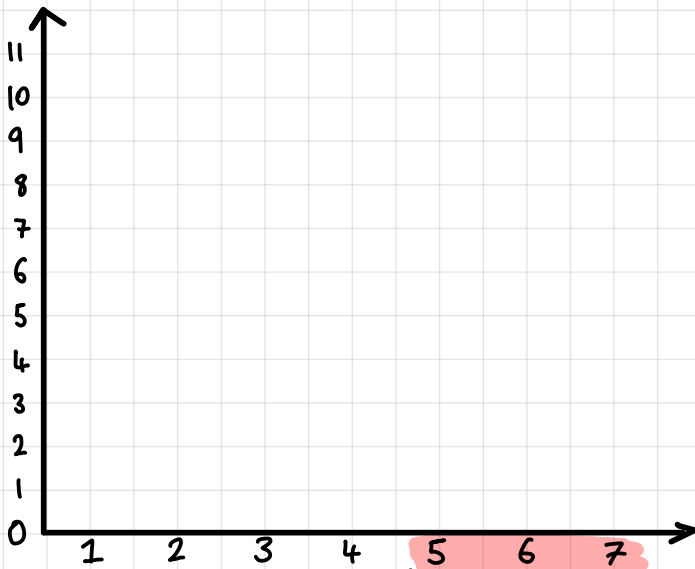
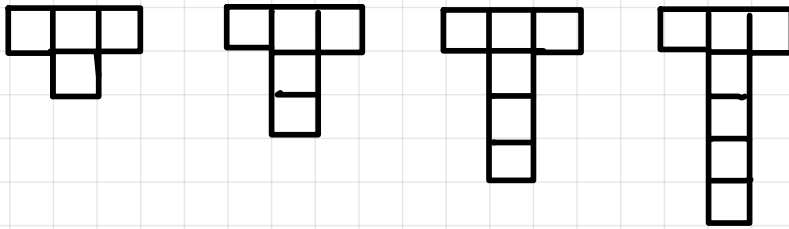
Exit Ticket - Sequences in a table

1) Complete the table:

Position	1	2	3
Term			



2) Plot the following onto a graph:



↳ can you continue the pattern for the 5th, 6th and 7th terms?

Hint

You can use the table below to help if you need:

Position	1	2	3	4	5	6	7
Term							