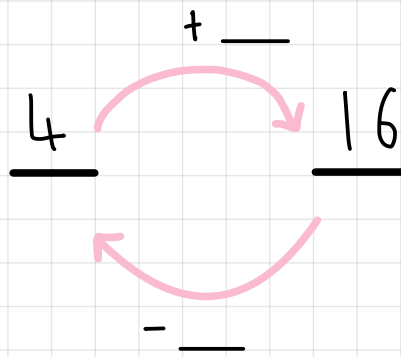
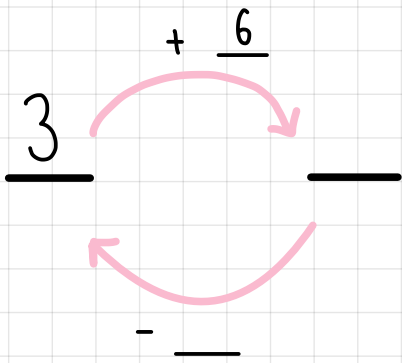
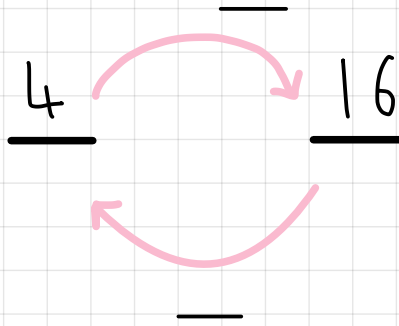
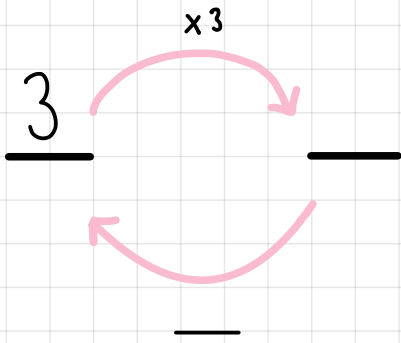


# exit ticket

add or multiply

Complete the diagrams :



6, 12, —

2, 4, 8, —

4, 12, 20, —

6, 12, —

2, 4, 8, —

4, 12, 20, —

Complete each of these sequences.

Can you think of multiple answers?