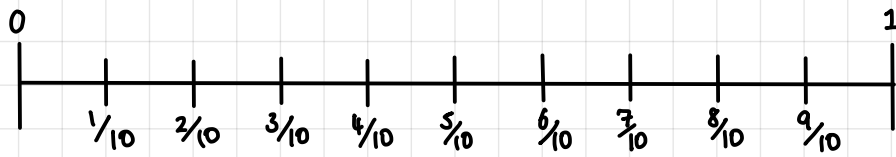


exit ticket

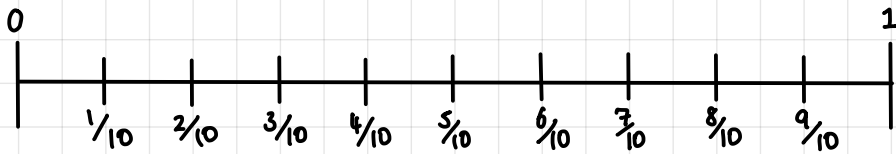
Fractions & decimals
on number lines

Draw an arrow to the value of:

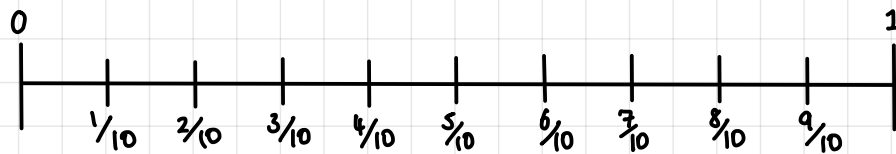
a) $\frac{6}{10}$



b) $\frac{75}{100}$



c) 0.2



d) 0.32

