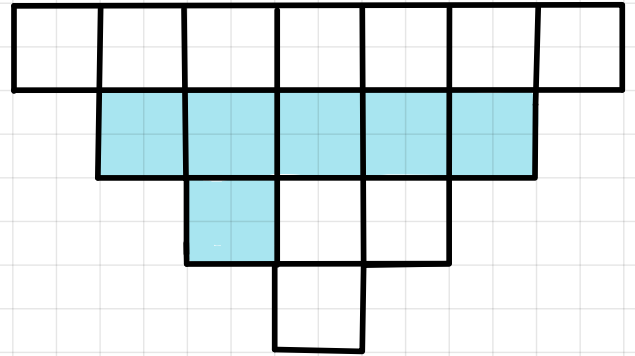
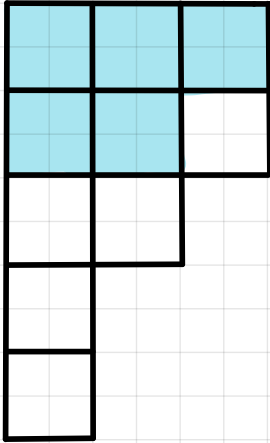



# exit ticket

fractions on diagrams/  
number lines


What fraction is shaded on these diagrams?  
\*simplify if possible




Shade the fractions of these shapes :



$\frac{1}{2}$



$\frac{1}{4}$



$\frac{1}{8}$

Are these arrows pointing to the same fractions?  
Explain your answer.

