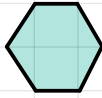
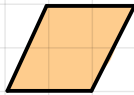
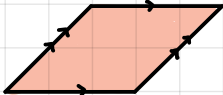

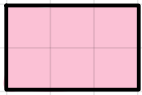


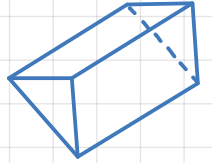

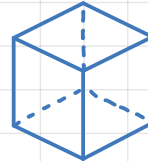
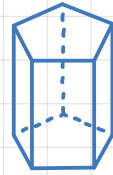
STEP 1: 2D & 3D SHAPES

Label the following shapes:



STEP 2: PRISMS

What are the common features of a prism?



faces =
edges =
vertices =

faces =
edges =
vertices =

faces =
edges =
vertices =

faces =
edges =
vertices =

STEP 3: NETS

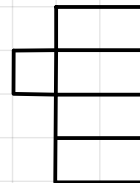
1 square = 1 cm

Below, draw the net of a 2cm cube

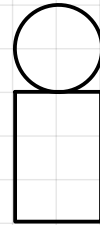
Below, draw the net of a 1cm, 2cm, 3cm cuboid

STEP 4: NETS


Complete the following nets:



Cuboid



Cylinder



Triangular Prism



Square-based pyramid