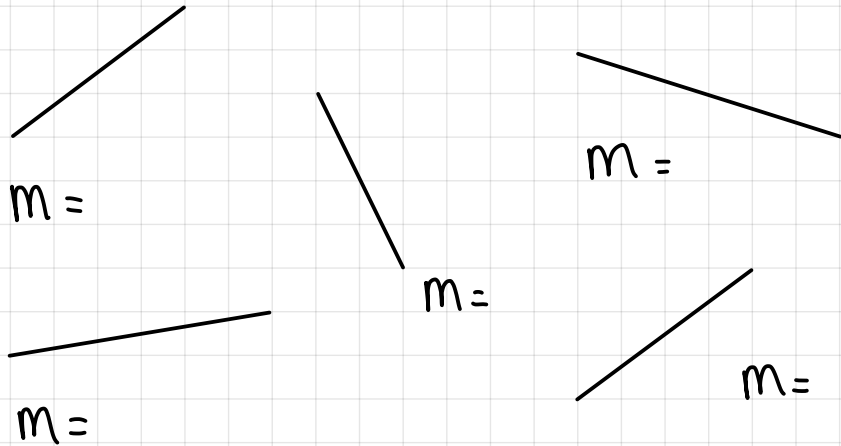
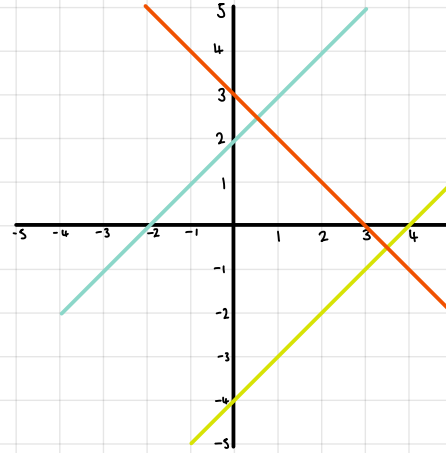


STEP 5: GRADIENT $Y = KX$

What are the gradients:



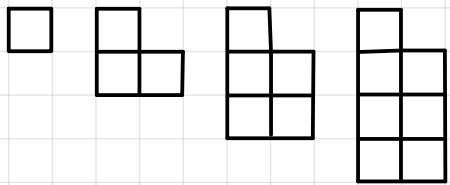
STEP 6: $Y = X + A$



What is the equations of:



STEP 7: GRAPHS & SEQUENCES



Fill in the table

Position	1	2	3	4
Term			5	

Plot the table above and

Position	1	2	3	4
Term	2	4	6	8



STEP 8: $Y = MX + C$

$$y = 3x + 1$$

$$y = \frac{1}{2}x + 3$$

$$y = -2x + 6$$

x	-3	0	3
y			

x	-3	0	3
y			

x	-3	0	3
y			

