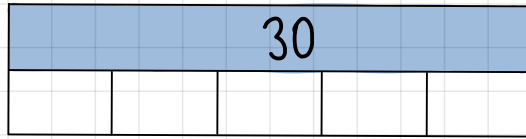


STEP 5: FIFTHS & QUARTERS



→ Fill in the gaps.

Convert the following:

$$\frac{1}{5} = \quad \frac{1}{4} = \quad 0.25 = \quad 0.6 =$$

$$\frac{2}{5} = \quad \frac{3}{4} = \quad 1.75 = \quad 0.8 =$$

STEP 6: EIGHTHS AND THOUSANDTHS




→ Fill in the gaps.

Convert the following:


$$0.002 = \quad 0.625 = \quad \frac{7}{8} =$$


$$0.125 = \quad 0.073 = \quad \frac{8}{1000} =$$


STEP 7: PERCENTAGES & HUNDRED SQUARE




Shade the grid:

 20%

 5%

 12%

 34%

STEP 8: CONVERT PERCENTAGES, FRACTIONS & DECIMALS

Percentages	Fractions	Decimals
32%		
		0.6
	$\frac{3}{8}$	
17%		
	$\frac{5}{1000}$	
		0.023