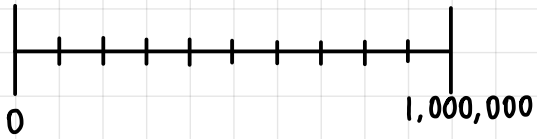
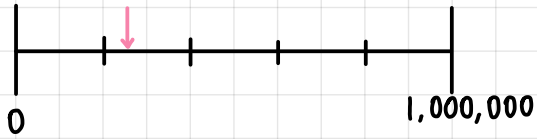


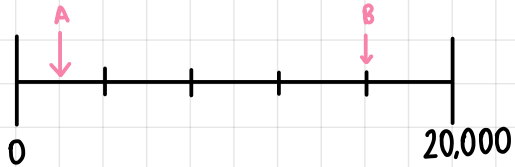
STEP 9: NUMBER LINE TO 1,000,000



Fill in the intervals.

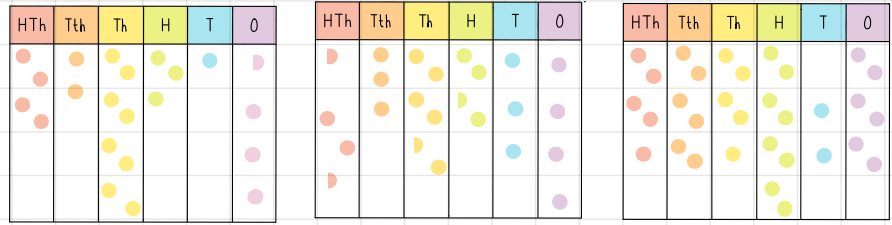


Estimate the value of the arrow



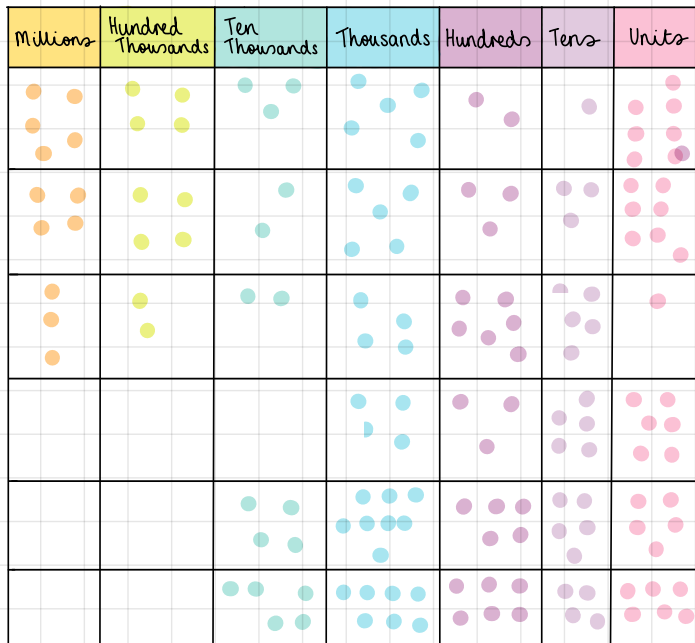
What's the difference between A & B?

STEP 10: COMPARE AND ORDER TO 100,000



Order these in ascending order.

STEP 11: COMPARE AND ORDER TO 1,000,000



order these in descending order.

STEP 12: ROUND TO THE NEAREST 10, 100 OR 1000

Number	Nearest 10	Nearest 100	Nearest 1000
356			
1273			
7621			
6999			
12			
8278			

Complete the table.